

Grade 2, Day 4 Math: Adding and Subtracting Fluently Within 1,000

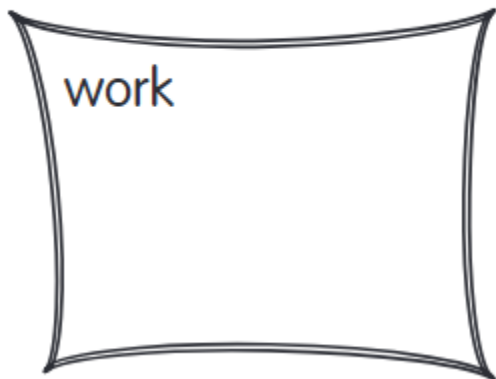
Activity 1:

Directions: Add with regrouping in the ones.

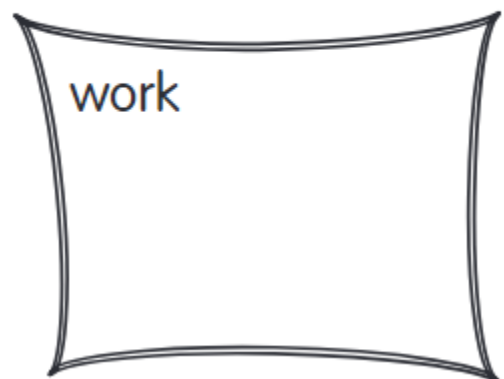
$$\begin{array}{r} 457 \\ + 234 \\ \hline \end{array}$$

$$\begin{array}{r} 158 \\ + 312 \\ \hline \end{array}$$

$729 + 103 = \underline{\hspace{2cm}}$



$114 + 127 = \underline{\hspace{2cm}}$



Directions: Add with regrouping in the tens.

$$\begin{array}{r} 654 \\ + 273 \\ \hline \end{array}$$

$$\begin{array}{r} 372 \\ + 144 \\ \hline \end{array}$$

$778 + 191 = \underline{\hspace{2cm}}$

$151 + 474 = \underline{\hspace{2cm}}$

work

work

Directions: Add with regrouping in the ones and tens.

$$\begin{array}{r} 255 \\ + 176 \\ \hline \end{array}$$

$$\begin{array}{r} 158 \\ + 89 \\ \hline \end{array}$$

$$\begin{array}{r} 197 \\ + 378 \\ \hline \end{array}$$

$$\begin{array}{r} 146 \\ + 266 \\ \hline \end{array}$$

$$\begin{array}{r} 475 \\ + 369 \\ \hline \end{array}$$

$$\begin{array}{r} 573 \\ + 249 \\ \hline \end{array}$$

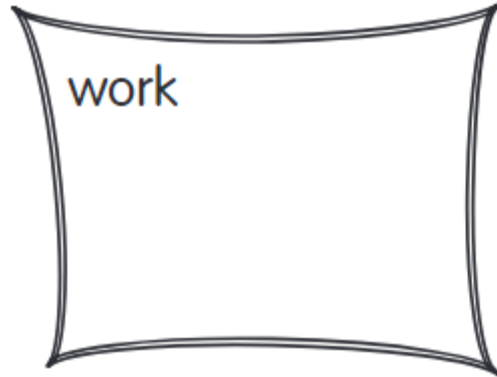
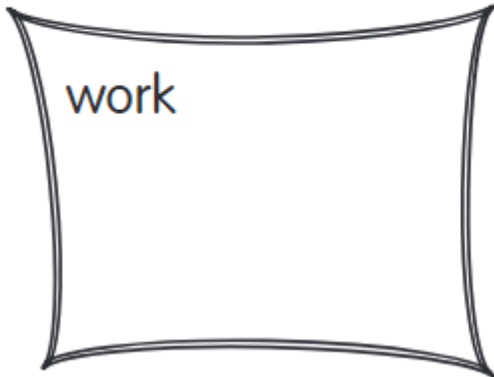
Directions: Subtract with regrouping in the ones.

$$\begin{array}{r} 758 \\ - 529 \\ \hline \end{array}$$

$$\begin{array}{r} 896 \\ - 258 \\ \hline \end{array}$$

$647 - 429 = \underline{\hspace{2cm}}$

$321 - 108 = \underline{\hspace{2cm}}$



Can you make and solve your own?

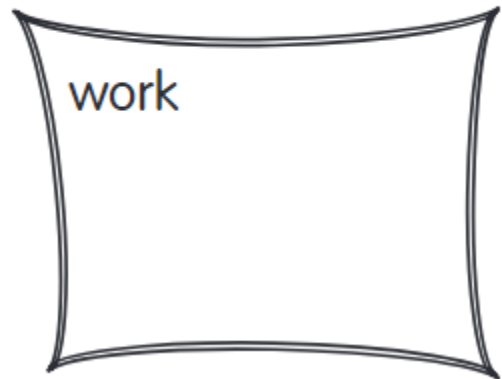
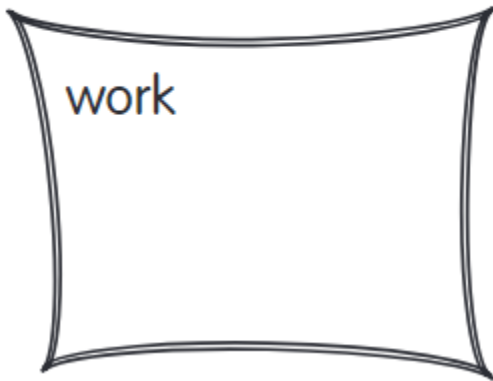
Directions: Subtract with regrouping in the hundreds and tens.

$$\begin{array}{r} 876 \\ - 295 \\ \hline \end{array}$$

$$\begin{array}{r} 647 \\ - 462 \\ \hline \end{array}$$

$549 - 372 = \underline{\hspace{2cm}}$

$939 - 587 = \underline{\hspace{2cm}}$



Can you make your own?

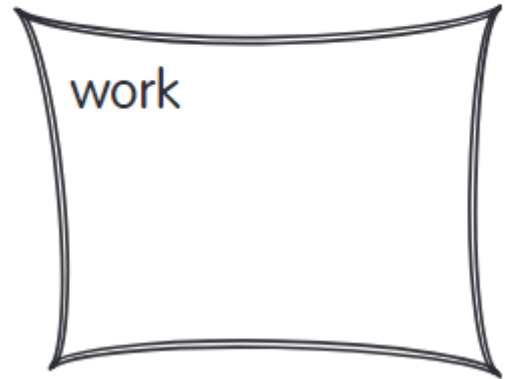
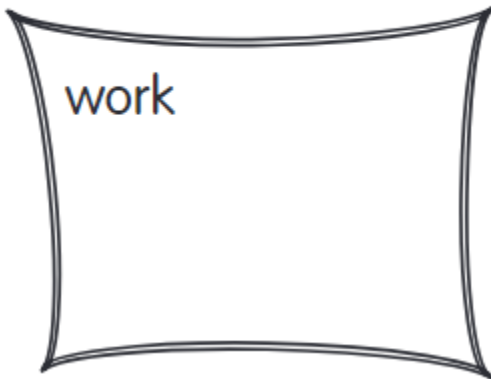
Directions: Subtract with regrouping in the hundreds, tens, and ones.

$$\begin{array}{r} 614 \\ - 267 \\ \hline \end{array}$$

$$\begin{array}{r} 435 \\ - 176 \\ \hline \end{array}$$

$735 - 257 = \underline{\hspace{2cm}}$

$571 - 108 = \underline{\hspace{2cm}}$



Activity 2:

Directions: Regroup. Subtract across zeros.

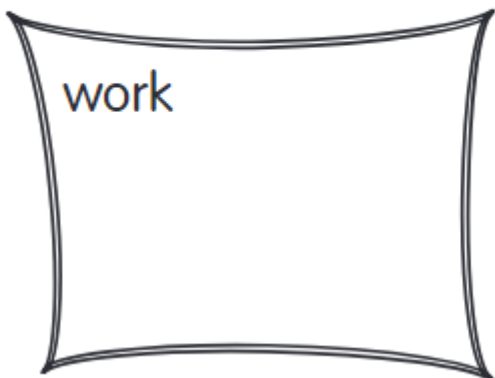
$$\begin{array}{r} 300 \\ - 176 \\ \hline \end{array}$$

$$\begin{array}{r} 500 \\ - 346 \\ \hline \end{array}$$

$$\begin{array}{r} 700 \\ - 365 \\ \hline \end{array}$$

$$\begin{array}{r} 600 \\ - 195 \\ \hline \end{array}$$

$800 - 348 = \underline{\hspace{2cm}}$



$900 - 609 = \underline{\hspace{2cm}}$

